

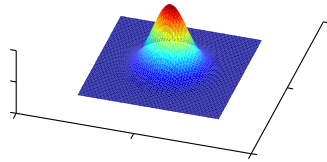
Math 3113 - Multivariable Calculus

Quiz #5 - 2008.02.25

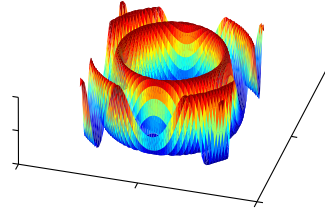
Name: _____

Match the following surfaces with their corresponding level curves.

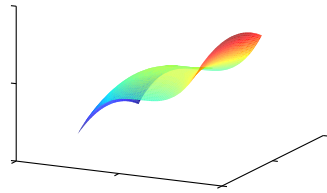
A



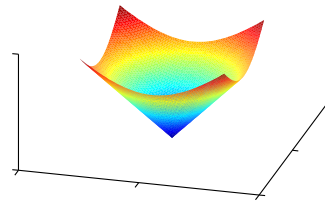
B



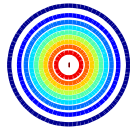
C



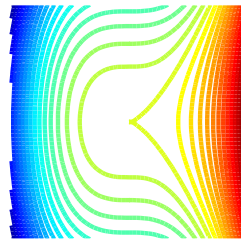
D




1



2



3



4

